

Supplementary problems for section 4.2

1.) The graph of the function  $F(x) = ax^3 + bx^2 + c$  contains critical points at  $(-2, 5)$  and  $(0, 1)$ . Find the values of  $a$ ,  $b$ , and  $c$ .

2.) Match each of the functions whose derivatives are given with one of the graphs below.

(a.)  $f'(x) = x(x+1)$

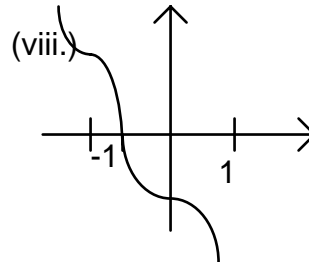
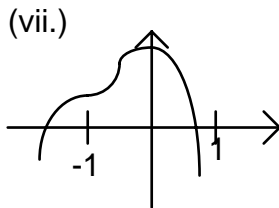
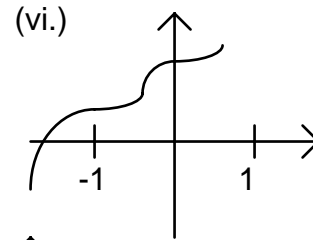
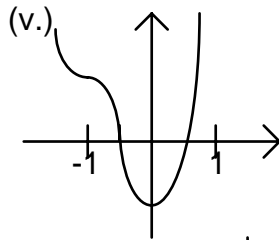
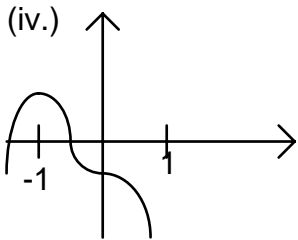
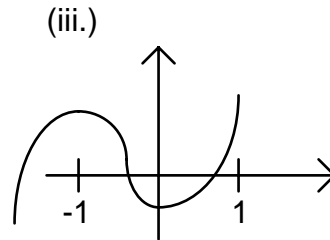
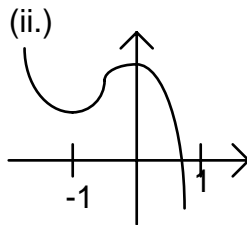
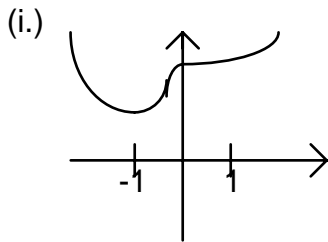
(d.)  $G'(x) = x^2(x+1)^2$

(b.)  $g'(x) = x^2(x+1)$

(e.)  $h'(x) = -x(x+1)$

(c.)  $F'(x) = x(x+1)^2$

(f.)  $H'(x) = -x(x+1)^2$



1.)  $a = 1, b = 3, c = 1$   
 2.) (a.)-(iii), (b.)-(ii), (c.)-(v), (d.)-(vi), (e.)-(ii), (f.)-(vii)